




# Count & Write

Count the circle in each row and write the number in the box.




# Answer key

## Count & Write

Count the circle in each row and write the number in the box.




1



2




3



4



5



6



7



8



9



10